



# **Balkan International Geography Olympiad**

**June 24 – 29, 2018, Iași - ROMANIA**

## **MULTIMEDIA TEST**

**Junior**

**Read the instructions on your worksheet carefully before answering the questions!**





**Q1**

**The city represented in this picture is located in:**

- A. Germany**
- B. Italy**
- C. France**
- D. Spain**





**Q2**

**These pictures represent three volcanoes from three continents. The fourth volcano that is also a decipoint can be depicted in picture:**

- A. 1**
- B. 2**
- C. 3**
- D. 4**





**Q3**

**The time of the day when this picture was taken is:**

- A. in the morning**
- B. at noon**
- C. in the evening**
- D. at sunset**



**Q4**

**This underwater museum is located:**

- A. at the bottom of the Pacific Ocean**
- B. at the bottom of the Atlantic Ocean**
- C. at the bottom of the Indian Ocean**
- D. at the bottom of the Mediterranean Sea**





**Q5**

**These pictures were taken in:**

- A. Japan**
- B. France**
- C. Singapore**
- D. Australia**





**Q6**

**The plant represented in this picture is:**

- A. tea**
- B. corn**
- C. rice**
- D. algae**





**Q7**

**A possible solution for the problem depicted in this picture is:**

- A. dam construction**
- B. slash and burn**
- C. selective logging**
- D. deforestation**





**Q8**

**The name of the capital cities on this map (marked with red dots) were replaced with the name of other cities representing which of the following?**

- A. same colonial heritage cities**
- B. same latitude cities**
- C. same longitude cities**
- D. same economic development level cities**





**Q9**

**These three pictures were taken in the same continent. Two of them are from the country with the highest soya bean production in the continent, while the third picture is from one of the following:**

- A. Peru**
- B. Brazil**
- C. Colombia**
- D. Mexico**





**Q10**

**In 2018, the phenomenon of development inequalities that can be depicted in this picture became an important problem in:**

- A. Taipei**
- B. Hong Kong**
- C. Macau**
- D. Singapore**





**Q11**

**This map shows a country in which the main religion is :**

- A. Christianity**
- B. Islamism**
- C. Buddhism**
- D. Animism**





**Q12**

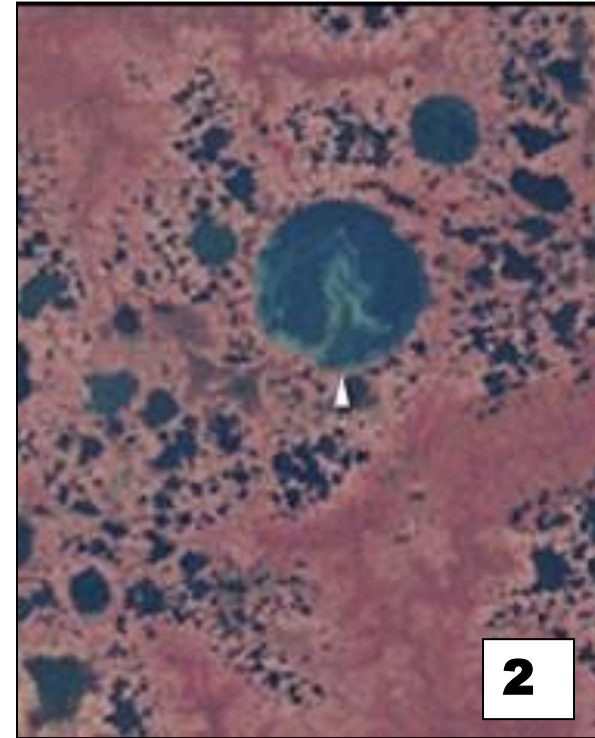
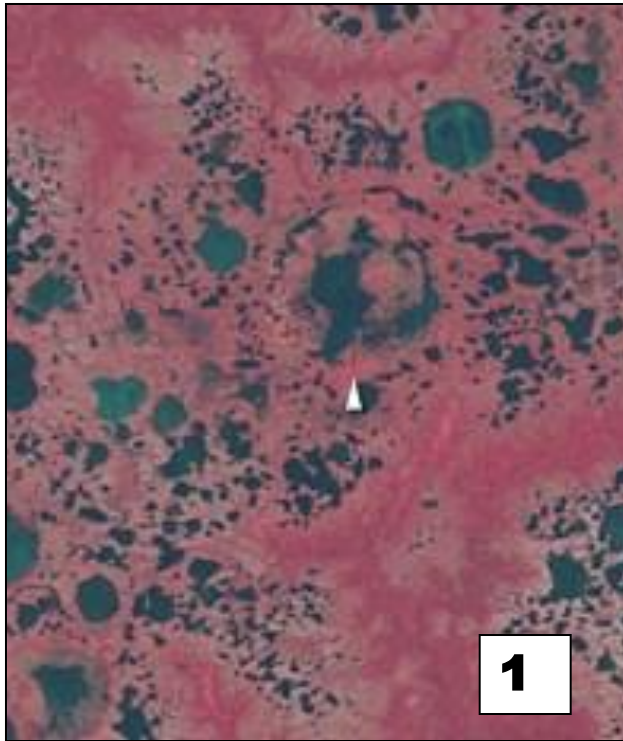
**This image was taken in Harrisburg, Pennsylvania. The process that this property undergoes is called:**

- A. urban renewal**
- B. façade restoration**
- C. gentrification**
- D. gerrymandering**





**Q13**



**The images above are satellite pictures taken in 1973 and in 2002 in the same area showing the transformation in the landscape. Which is the appropriate description of the pictures?**

- A. Siberian lakes in 1973 (image 1) and 2002 (image 2)**
- B. Siberian lakes in 1973 (image 2) and 2002 (image 1)**
- C. Aral Lake in 1973 (image 1) and 2002 (image 2)**
- D. Aral Lake in 1973 ((image 2) and 2002 (image 1)**



**Q14**

**This map shows:**

- A. the Internet coverage**
- B. Google street view coverage**
- C. Facebook coverage**
- D. the railway network**





**Q15**

**This image shows:**

- A. an American suburbia**
- B. an English suburbia**
- C. an American CBD**
- D. an English CBD**






**Q16**

**The two countries represented in this picture are:**

- A. Chad and R. Congo**
- B. Mali and Niger**
- C. Kenya and Mali**
- D. Chad and Paraguay**






**Q17**

**This synoptic map illustrates :**

- A. a hot air wave**
- B. a hurricane eye**
- C. a squall line**
- D. gusts**





**Q18**

**This picture shows:**

- A. a reindeer race**
- B. the reindeer migration**
- C. an elk race**
- D. the elk migration**

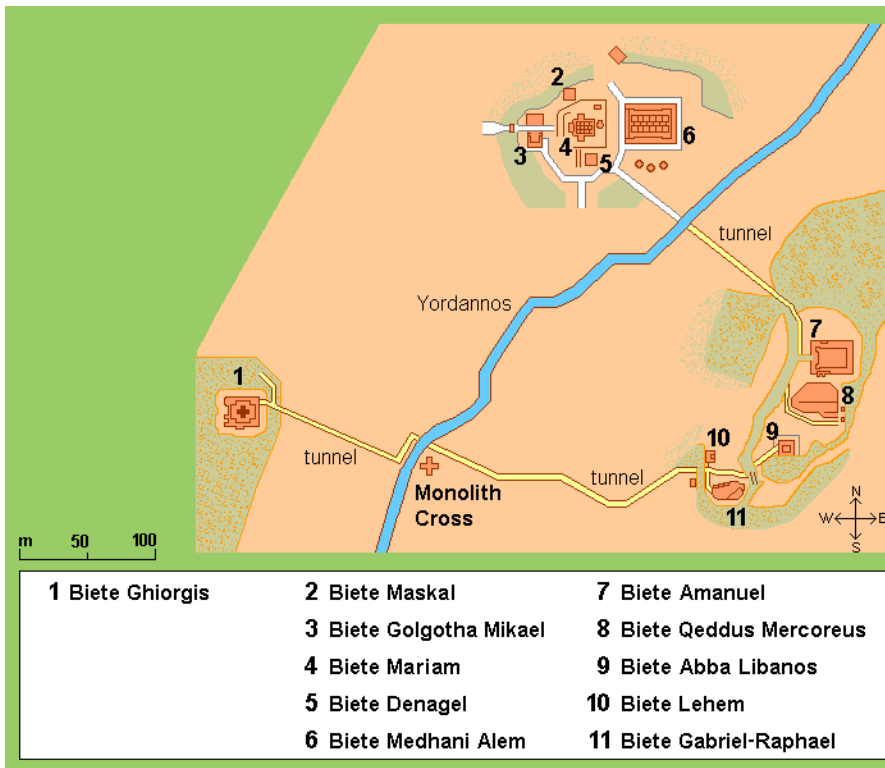




**Q19**

**This religious building is a UNESCO heritage site in Ethiopia. It is famous for the pilgrimage of the:**

- A. Roman Catholic believers**
- B. Orthodox believers**
- C. Islamic believers**
- D. Judaism believers**





**Q20**

**The type of building structure shown in this picture is specific to:**


- A. Poland**
- B. Spain**
- C. Alaska**
- D. Mexico**



**Q21**

**These three pictures illustrate an important, yet unexploited natural resource named:**

- A. shale oil**
- B. polymetallic nodules**
- C. peat**
- D. lava**





**Q22**

**This satellite image shows a natural border between two states.  
The two bodies of water marked with 1 and 2 are:**


- A. Atlantic Ocean (1), Pacific Ocean (2)**
- B. Baltic Sea (1), North Sea (2)**
- C. Atlantic Ocean (1), Mediterranean Sea (2)**
- D. Atlantic Ocean (1), Baltic Sea (2)**



**Q23**

**The idea that describes this picture the best is:**

- A. new building construction requires the demolition of the old buildings**
- B. new building and old buildings have complementary purposes**
- C. gentrification is focused on sky-scraper construction**
- D. the old centers of the cities are replaced by CBDs**



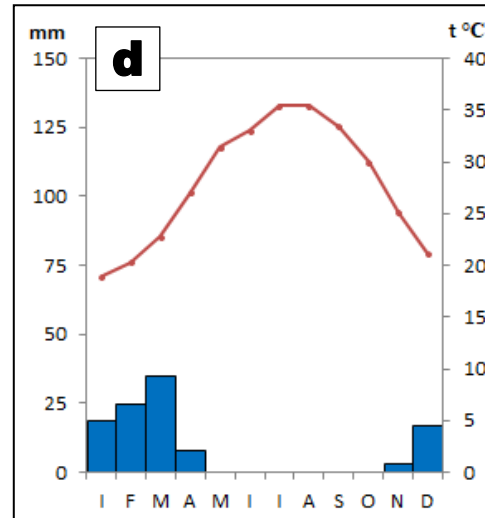
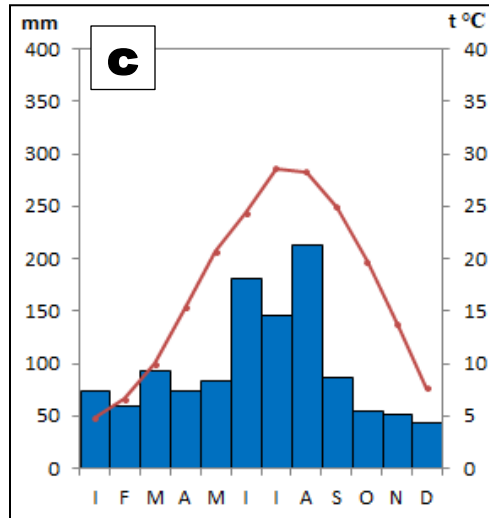
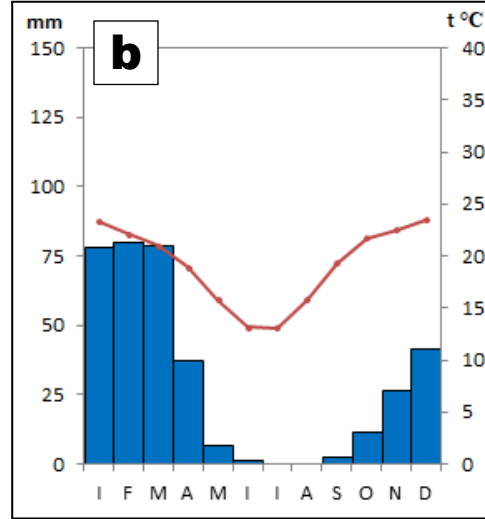
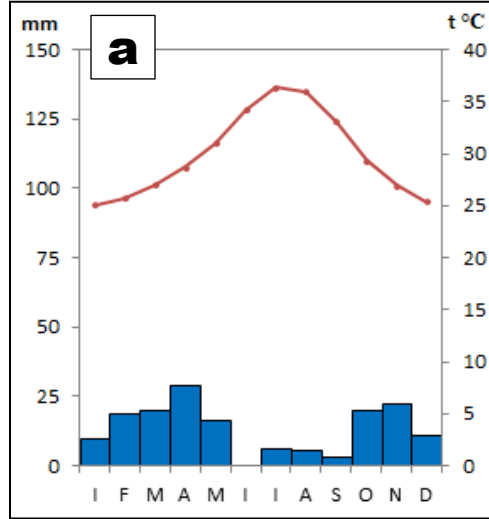


**Q24**

**This is an entertainment district that has the same name in London, Hong Kong, New York, Malaga and Buenos Aires. In London it is well known for its entertainment function, restaurants, clubs and film industry. The name of the district is:**

- A. Trafalgar Square**
- B. CBD**
- C. Soho**
- D. Kowloon**



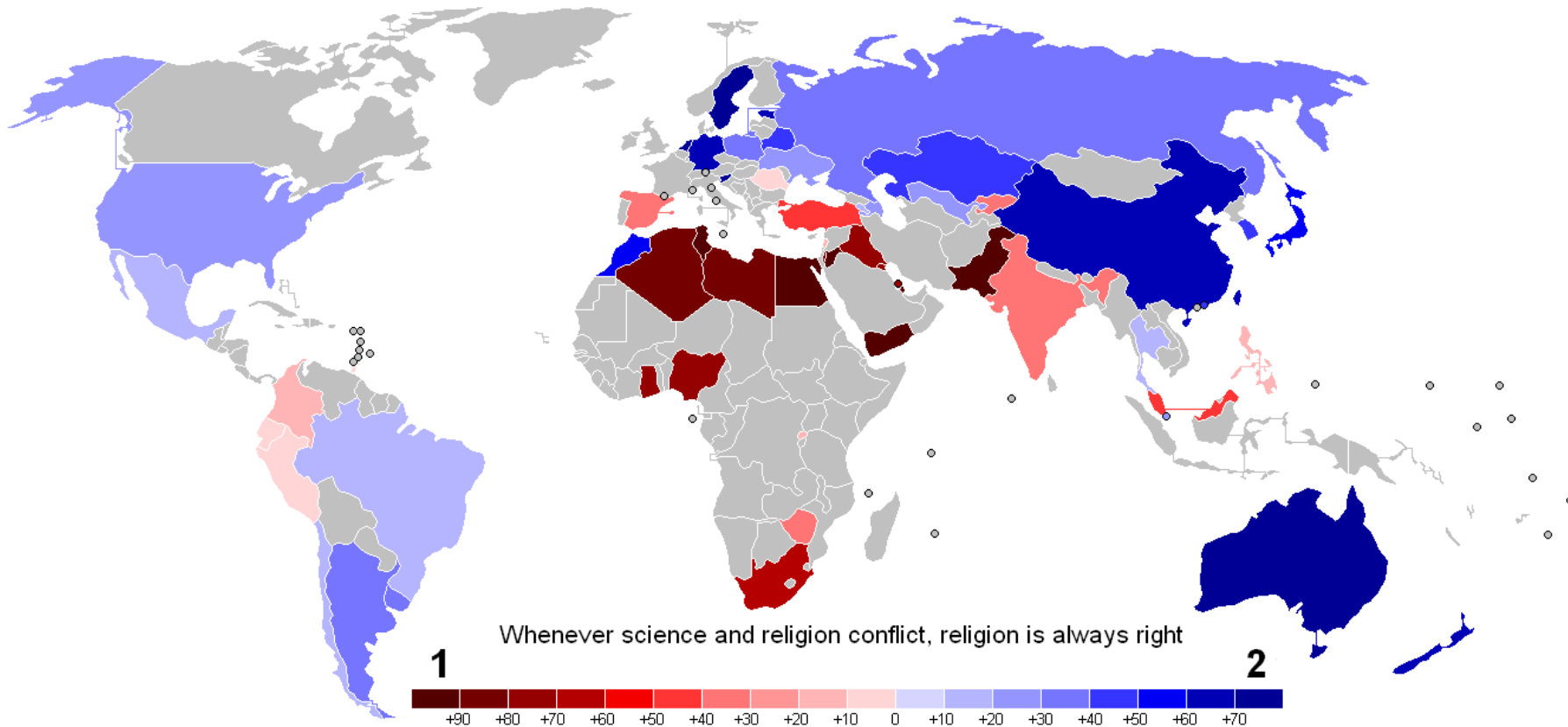
**Q25****Which climate graph corresponds to the city shown in the picture below?****A. a****B. b****C. c****D. d**



**Q26**

**This map represents the spectrum of answers regarding the provided statement “Whenever science and religion conflict, religion is always right.”. The answer noted with 1 in the legend is:**

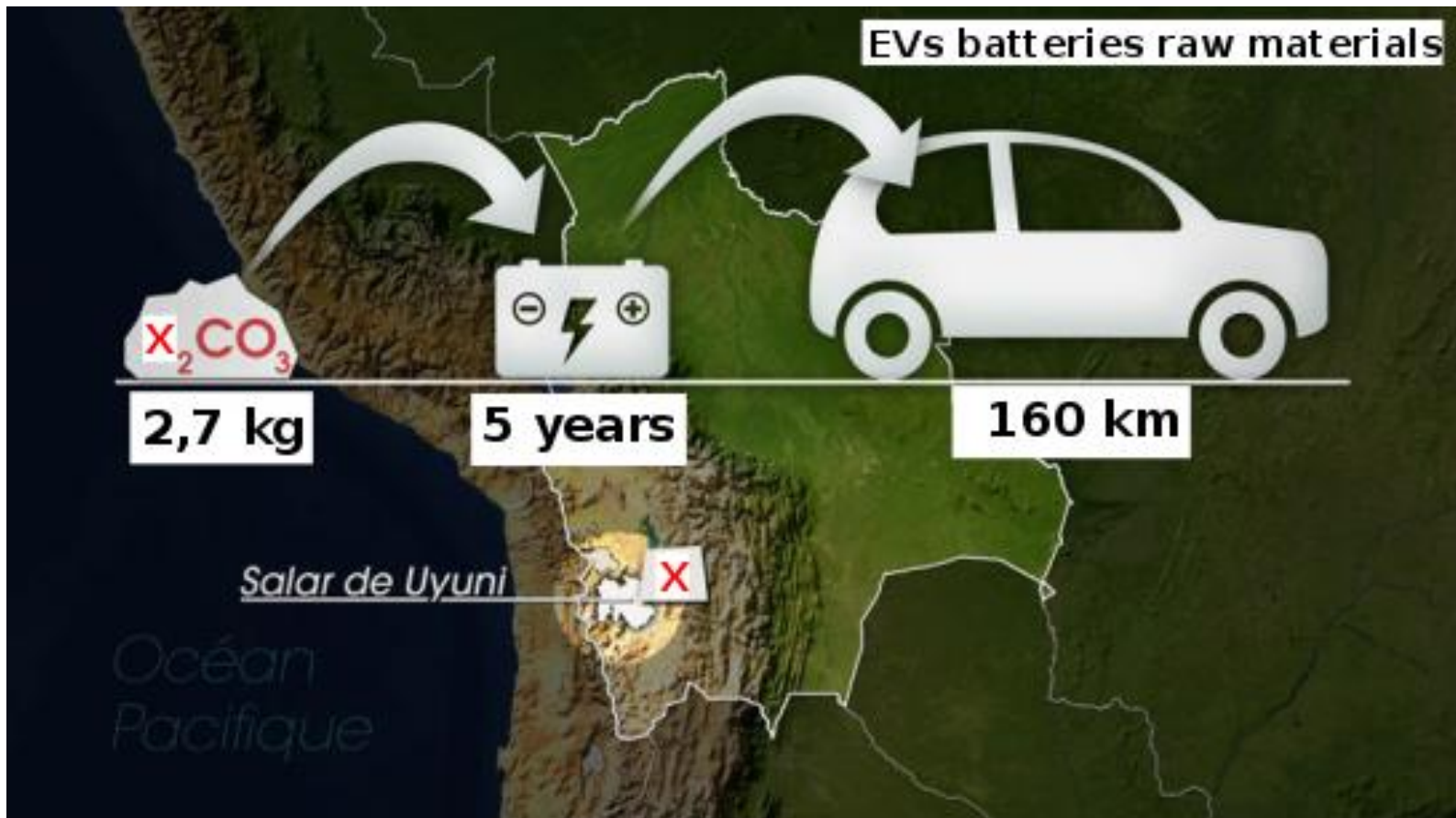
- A. slightly agree**
- B. agree**
- C. slightly disagree**
- D. disagree**



**Q27**

Which chemical element, replaced by X in the figure below, is set to be the main component of the electric vehicles' batteries?

- A. Lithium
- B. Sodium
- C. Nickel
- D. Lead





**Q28**

**The landform in the images is:**

- A. a sugar loaf**
- B. a tepui**
- C. a yardang**
- D. a stack**





**Q29**

**These chaotic trees are a consequence of:**

- A. landslides**
- B. rainfall excess**
- C. permafrost thawing**
- D. strong winds**

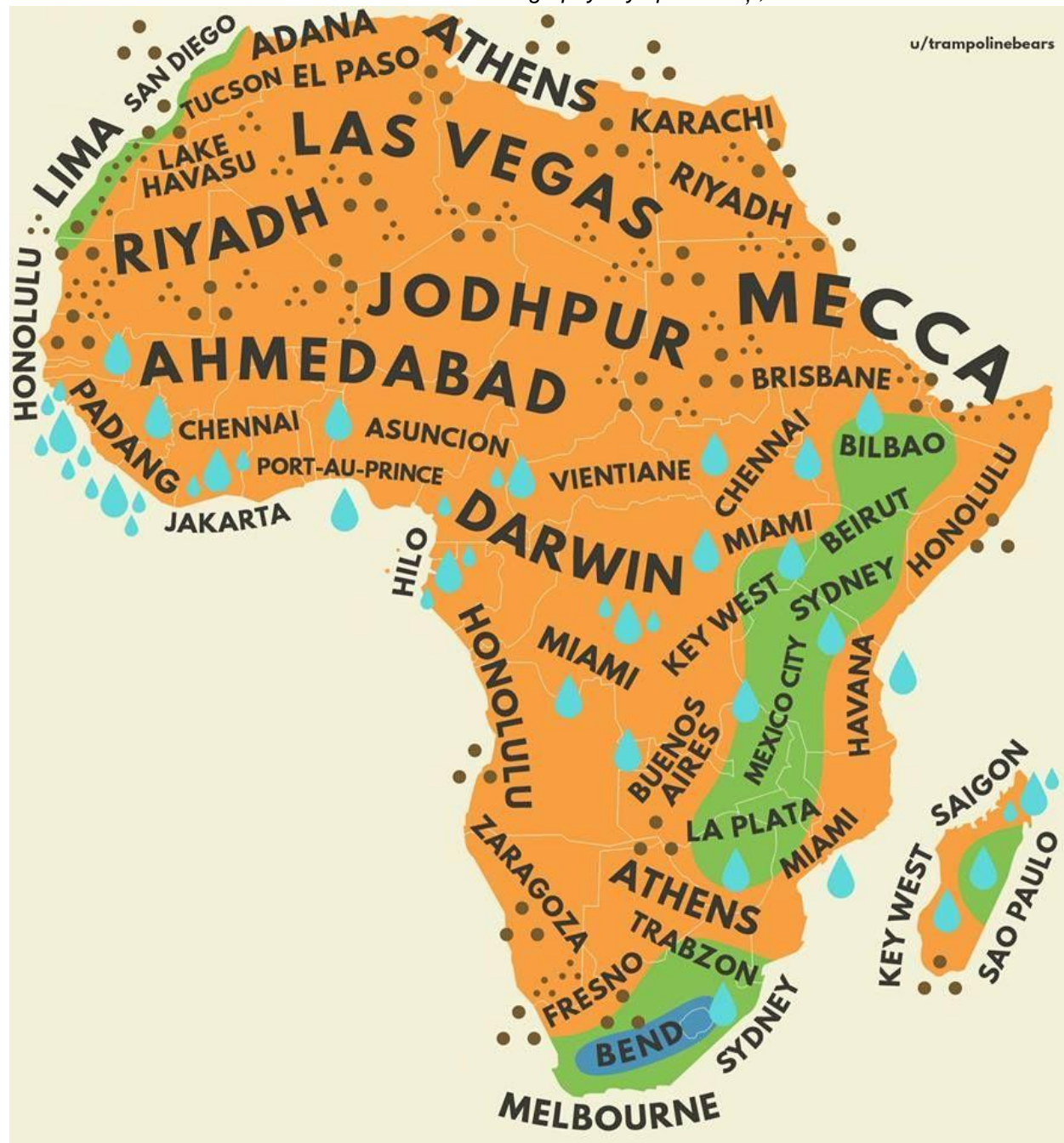




**Q30**

**This map shows:**

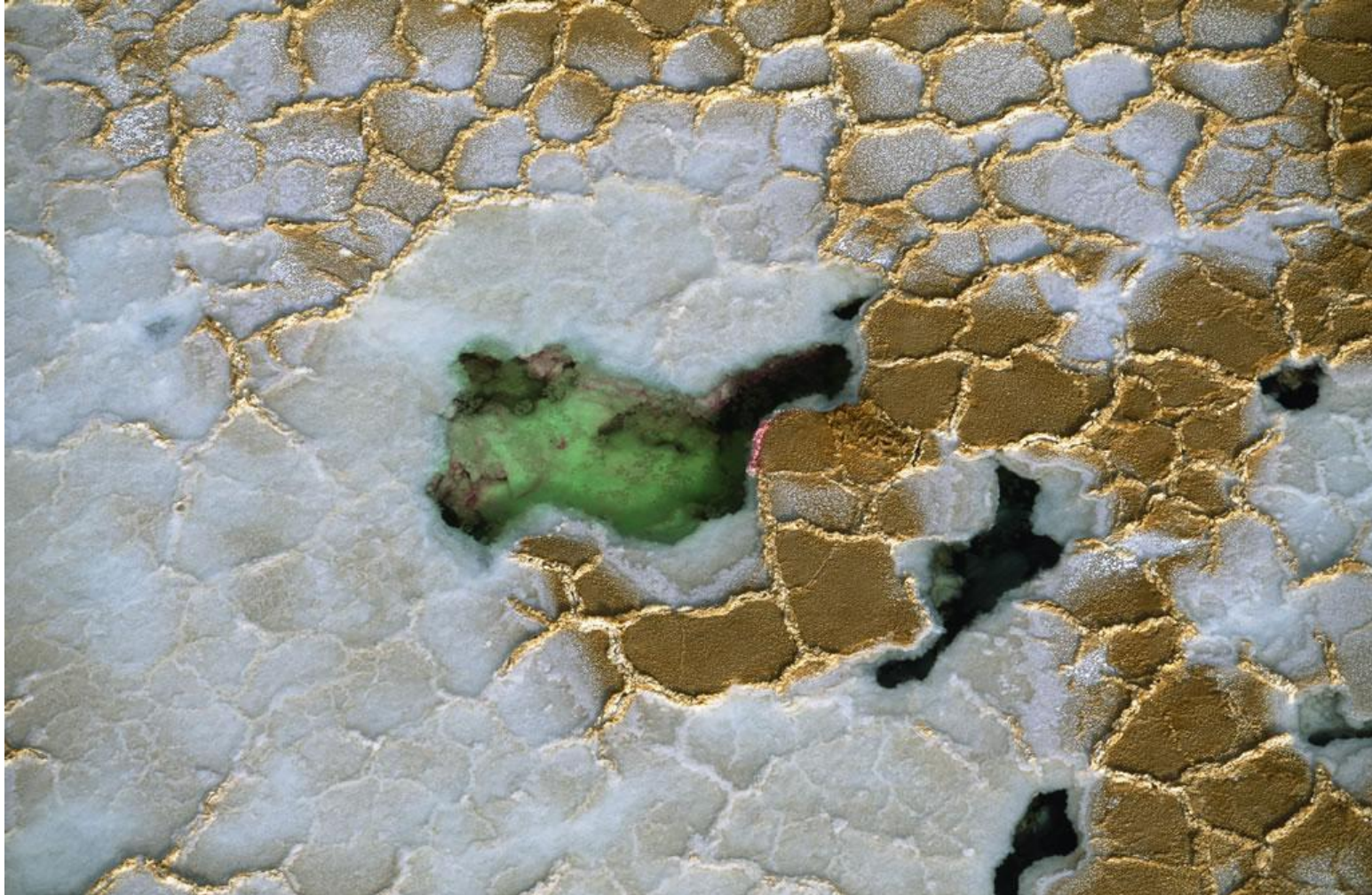
- A. the cities with the same climate as the area they are placed in**
- B. the cities with the same development level as the area they are placed in**
- C. the cities with the same dominant religion as the area they are placed in**
- D. the cities with the same vegetation type as the area they are placed in**



**Q31**

**What does the white area represent?**

- A. snow**
- B. limestone**
- C. salt**
- D. white sand**





**Q32**

**This picture shows a consequence of:**

- A. the uneven distribution of financial resources**
- B. the uneven distribution of housing spaces**
- C. the uneven distribution of urban facilities**
- D. all of the above**





**Q33**

**The following picture shows:**

- A. a vineyard**
- B. an oil palm plantation**
- C. a lemon tree plantation**
- D. an olive tree plantation**





**Q34**

**The following two pictures are related to each other. What cardinal direction does the tree in the first picture point to?**

- A. North**
- B. East**
- C. Northeast**
- D. Southwest**



**Q35**

**The landform depicted in the picture below is called:**

- A. Paha**
- B. Talik**
- C. Palsa**
- D. Pingo**





**Q36**

**The trees in these images have different economic uses. Choose the one that is primarily used to make a light material\* that is waterproof and floats:**

- A. 1**
- B. 2**
- C. 3**
- D. 4**

*\*Hint. This light material is mainly used for bottle stoppers*



**Q37**

**This Russian flag was installed in which of the following places :**

- A. on the Moon**
- B. at the North Pole**
- C. at Nemo Point**
- D. in a human body**





**Q38**

**The volcano that can be depicted in the picture is well known for one of its devastating eruptions that took place in ancient times and buried three settlements under volcanic ash and lava. Today the area around the volcano is declared a national park. The name of the volcano is:**

- A. Mt. St. Helens**
- B. Tambora**
- C. Krakatau**
- D. Vesuvius**





**Q39**

**The settlement in this picture belongs to the:**

- A. Inuit people**
- B. Sami people**
- C. Nenet people**
- D. Gipsy people**





**Q40**

**This is your last question in this Multimedia Test and the last one in the Balkan International Geography Olympiad.**

**How did you find this Multimedia Test?**

- A. easy**
- B. medium**
- C. difficult**
- D. very difficult**

*University "Al.exandru Ioan Cuza" Iași - Romania*



*Palace of Culture Iași - Romania*



*We hope you enjoyed it!*

**CONGRATULATIONS for participating in this international Geography competition!**  
**We were happy to have you here and we wish you the very best for the future!**

**Balkan International Geography Olympiad**  
**June 24 – 29, 2018, Iași - ROMANIA**



**Authors of this MULTIMEDIA TEST:**

**Daniela LARION**

**Andra-Cosmina ALBULESCU**

Department of Geography, University *Alexandru Ioan Cuza* of Iași, Romania

Other contributors: Ionuț ȘOREA, Stefania URSICĂ