

Balkan International Geography Olympiad

June 24 – 29, 2018, Iași – Romania

MULTIMEDIA TEST

Younger Junior



Read the instructions on your worksheet carefully before answering the questions!



Q1

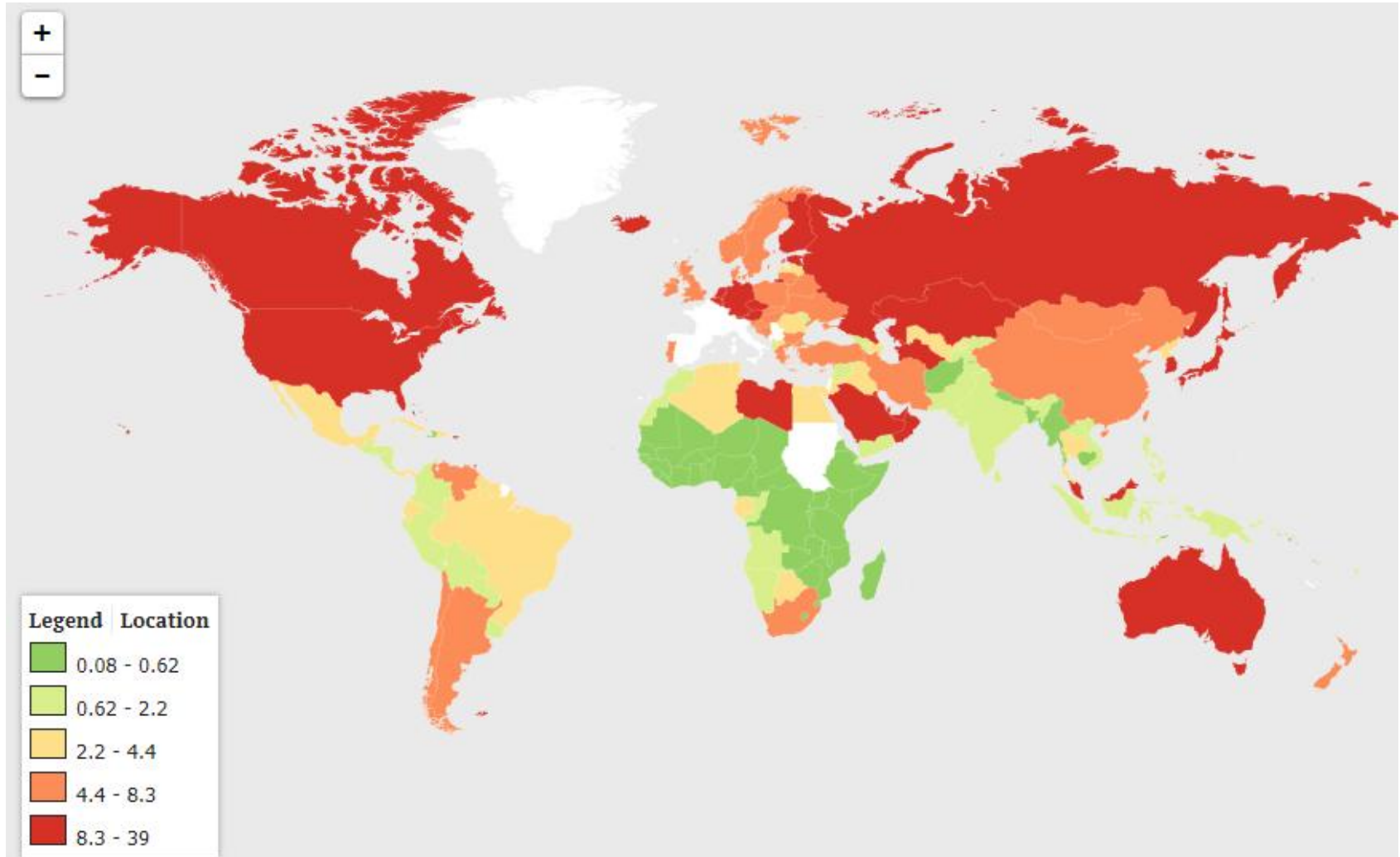
These pictures were taken in:

- A. Japan**
- B. France**
- C. Singapore**
- D. Australia**



Q2**The element represented in this map is:**

- A. population density**
- B. literacy rate**
- C. wheat production**
- D. CO₂ emissions per capita**



Q3

**This before and after pictures show the effects of human caused action.
This action is:**

- A. a human caused fire**
- B. a nuclear accident**
- C. an industrial hazard**
- D. a nuclear bombing**

Before




Photo: AFP

After



www.teror-victims.com

Q4

Two of these pictures are representative for a country known for its restrictive immigration policy, while the other is specific to a country in which the Roman Catholicism is the dominant religion. The intruder is:

- A. Australia**
- B. Brazil**
- C. Canada**
- D. Argentina**



Q5

This picture was taken in:

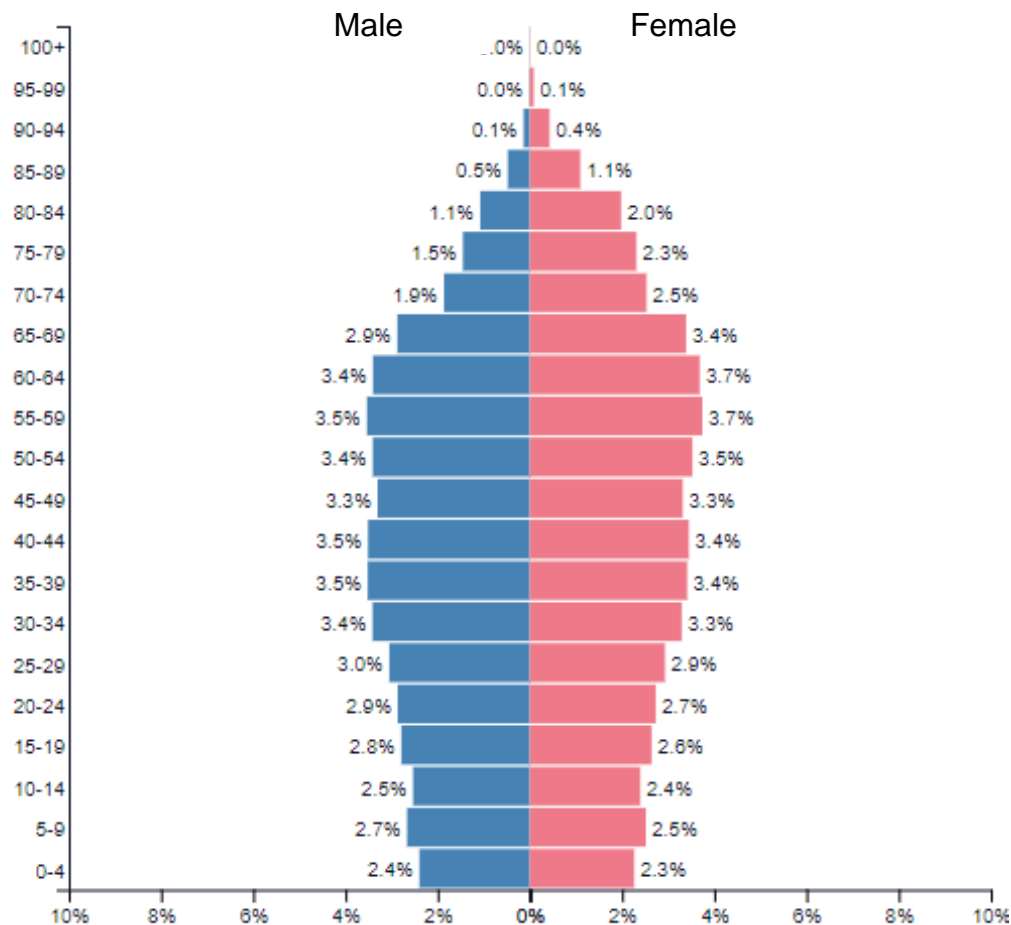
- A. Chad**
- B. Bangladesh**
- C. Oman**
- D. Peru**



Q6**This population pyramid belongs to:**

- A. Ivory Coast**
- B. Croatia**
- C. Chile**
- D. Belarus**

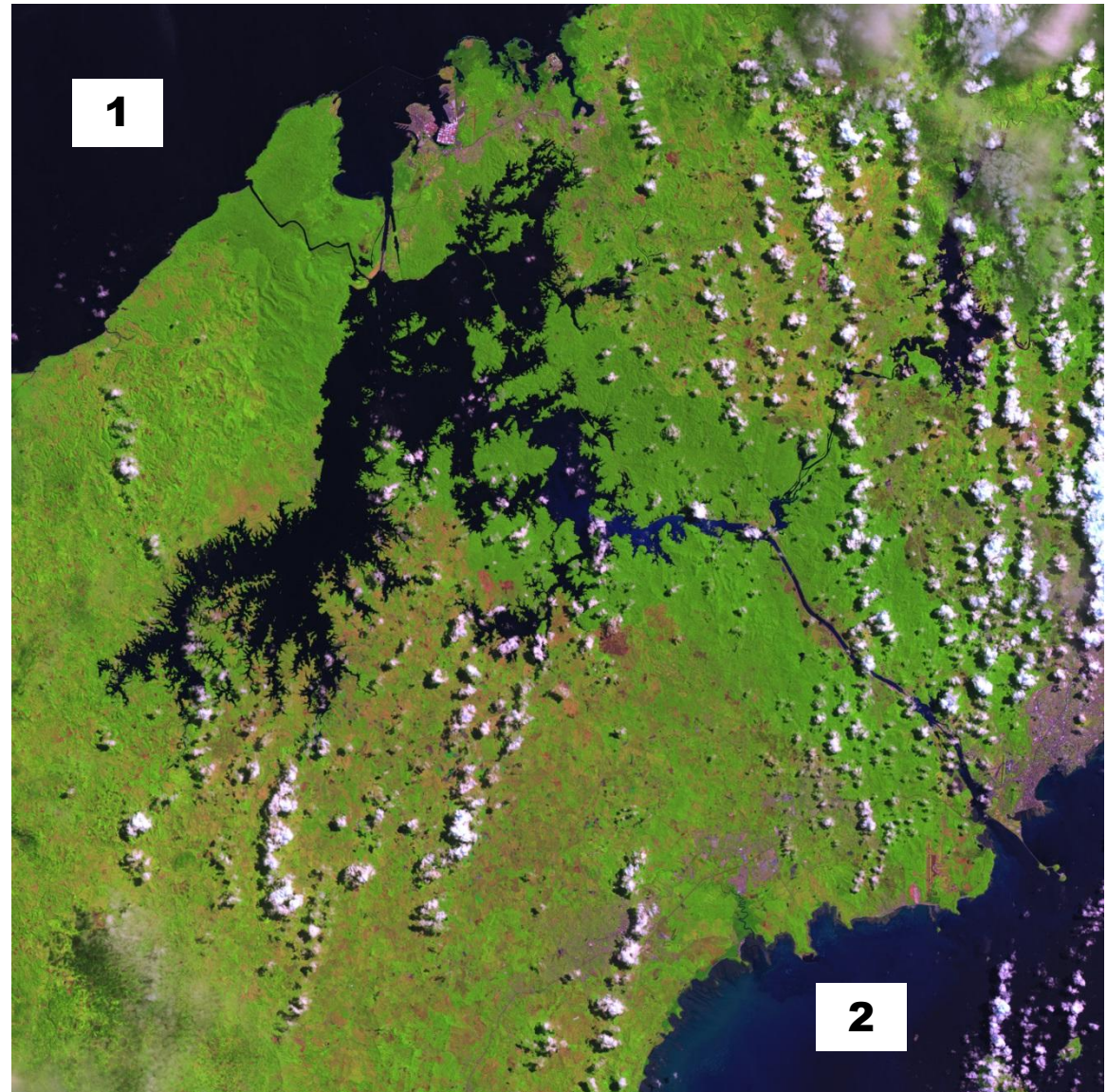
Year: 2017; Population: 4,209,815



Q7

The Canal in this image was completed in 1914, linking two bodies of water:


- A. Red Sea (1)
Mediterranean Sea (2)**
- B. Mediterranean Sea (1)
Red Sea (2)**
- C. Pacific Ocean (1)
Atlantic Ocean (2)**
- D. Atlantic Ocean (1)
Pacific Ocean (2)**



Q8

This picture was taken in the Yangtze River Delta. The elements that can be observed are:

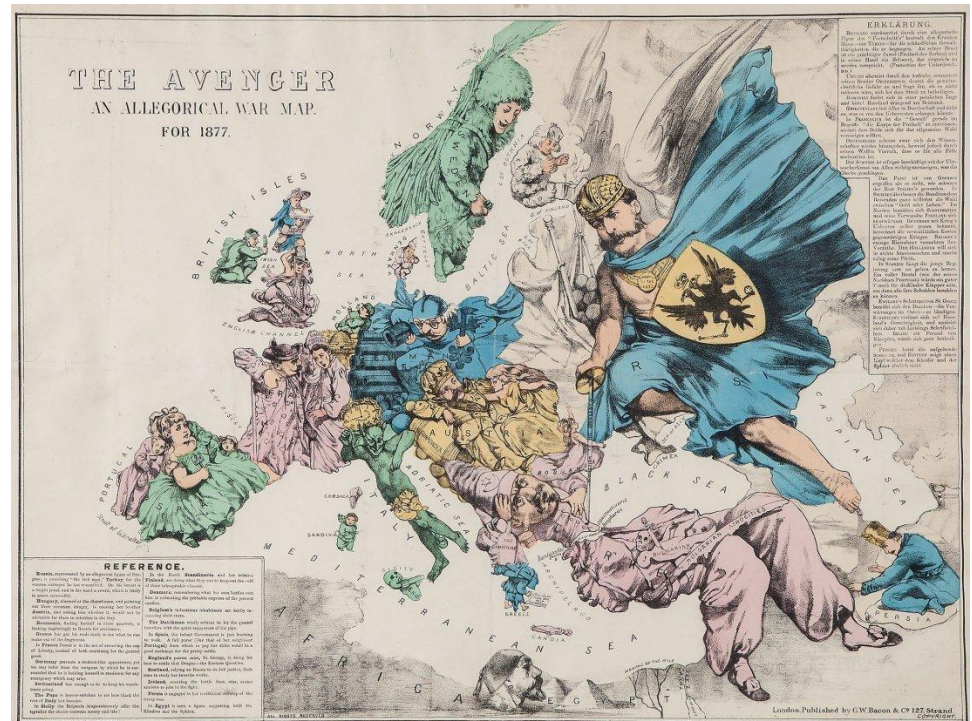
- A. skyscrapers**
- B. luxury boats**
- C. oil rigs**
- D. water pumps**



Q9

The Human Geography field that these pictures refer to is:

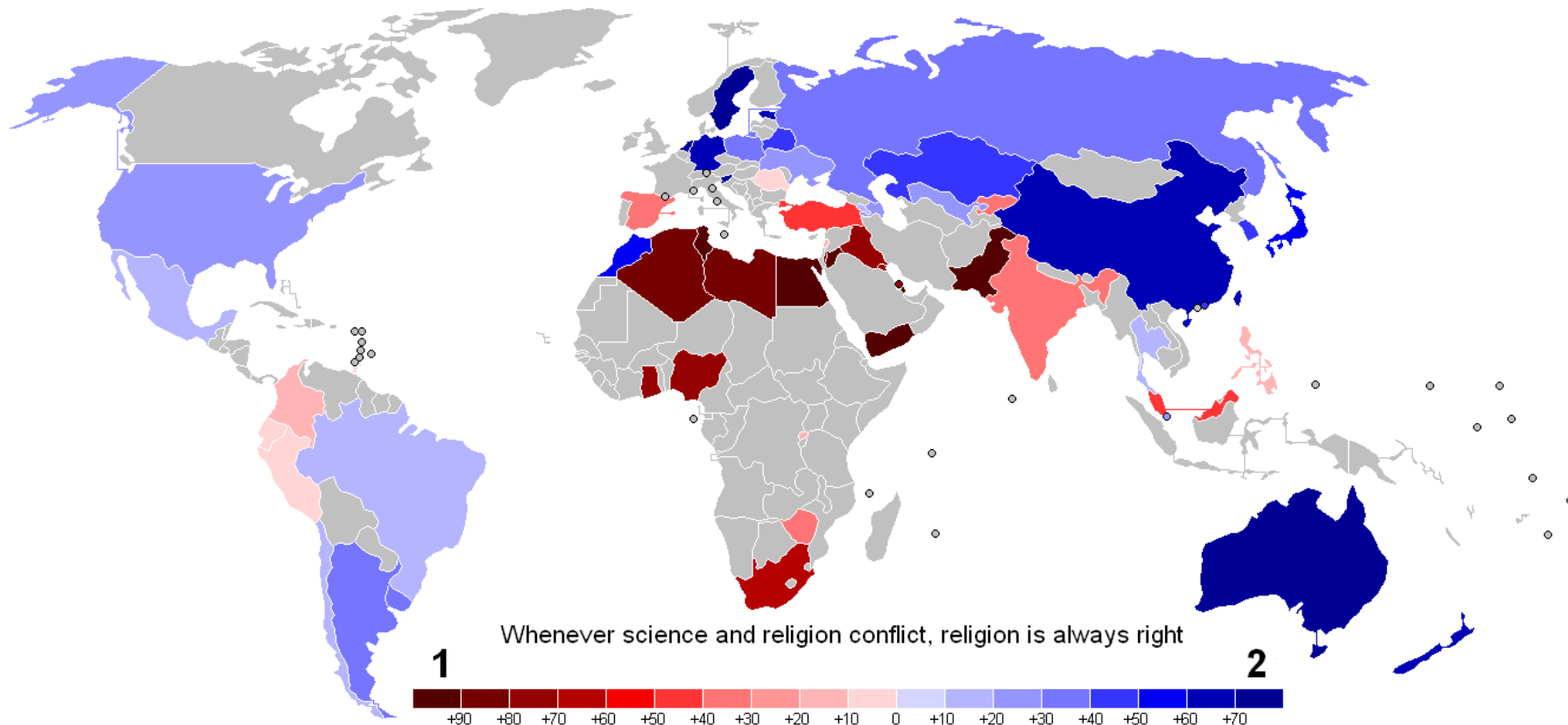
- A. Economic Geography
- B. Geopolitics
- C. Medical Geography
- D. Military Geography



Q10

This map represents the spectrum of answers regarding the provided statement “Whenever science and religion conflict, religion is always right.”. The answer noted with one is:

- A. slightly agree**
- B. agree**
- C. slightly disagree**
- D. disagree**



Q11

This picture shows:

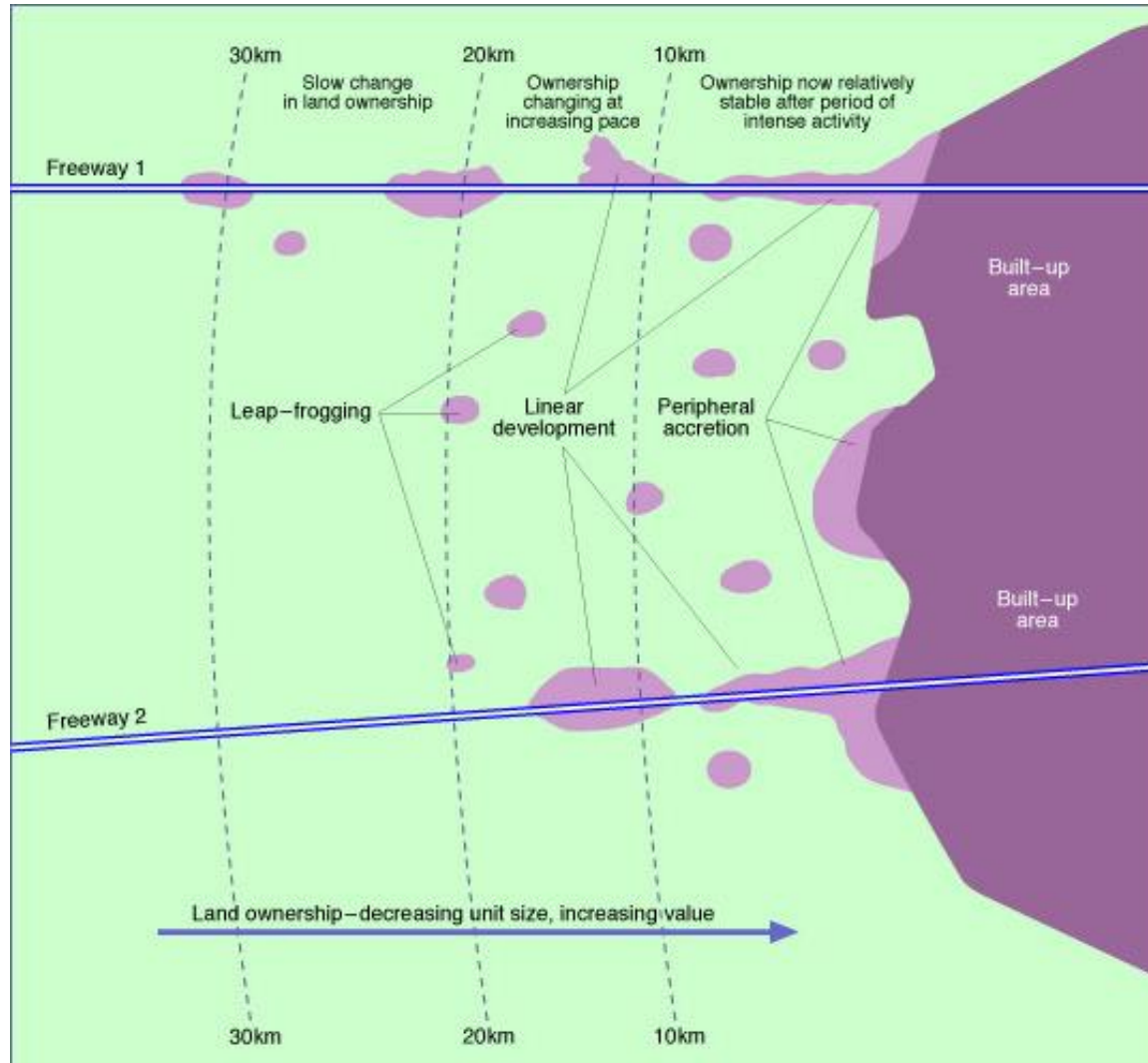
- A. a reindeer race**
- B. the reindeer migration**
- C. an elk race**
- D. the elk migration**



Q12

This is an example of a:

- A. rural - urban fringe**
- B. gentrification process**
- C. suburbanisation process**
- D. urban land use**



Q13

This type of landform is not specific to

- A. Mexico**
- B. Philippines**
- C. Chile**
- D. Pakistan**



Q14

The city represented in this picture is located in:

- A. France**
- B. Italy**
- C. Spain**
- D. Germany**



Q15

The type of building structure shown in this picture is specific to:

- A. Mexico**
- B. Spain**
- C. Alaska**
- D. Poland**



Q16

The time of the day when this picture was taken is:

- A. in the morning**
- B. at noon**
- C. in the evening**
- D. at sunset**



Q17

The following picture was taken in:

- A. India**
- B. Brazil**
- C. Italy**
- D. Argentina**



Q18

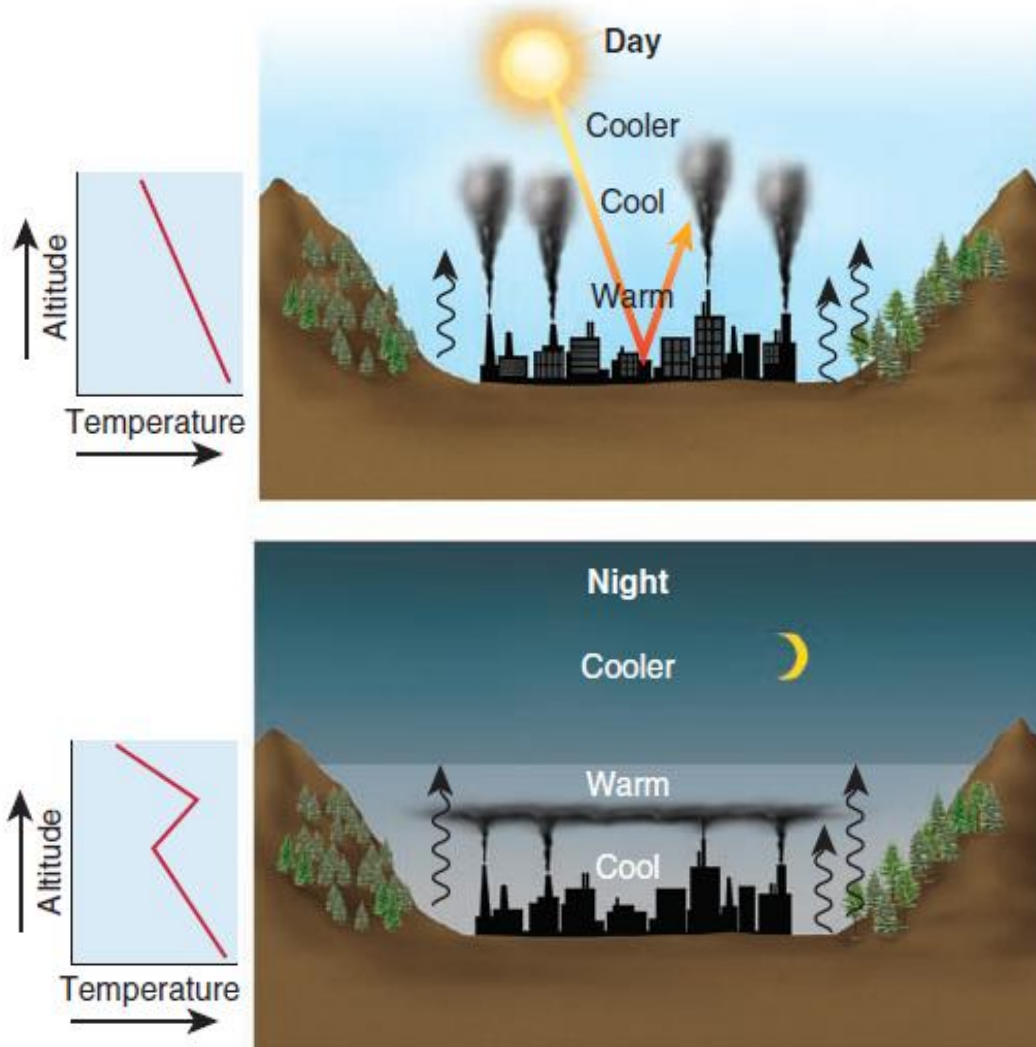
The following brands belong to a transnational food and drink company headquartered in which country?

- A. United States**
- B. Italy**
- C. Switzerland**
- D. China**



Q19**Which phenomenon is depicted in the following pictures?**

- A. temperature inversion**
- B. global warming**
- C. urban heat island effect**
- D. evapotranspiration**



Q20

This picture illustrates the Yankee Doodle Tailings Pond in Butte, Montana. It is used as a:

- A. reservoir**
- B. dumping site**
- C. entertainment area**
- D. fishing area**



Q21

This Russian flag was installed in which of the following places :

- A. on the Moon**
- B. at the North Pole**
- C. at Nemo Point**
- D. in a human body**



Q22

**This satellite image shows a natural border between two states.
The two bodies of water marked with 1 and 2 are:**

- A. Atlantic Ocean (1), Pacific Ocean (2)**
- B. Baltic Sea (1), North Sea (2)**
- C. Atlantic Ocean (1), Mediterranean Sea (2)**
- D. Atlantic Ocean (1), Baltic Sea (2)**



Q23

The three pictures were taken on the same island on the 26th of December 2004. The island is:

- A. Cuba**
- B. Sumatra**
- C. Hawaii**
- D. Hokkaido**



Q24

This picture shows a consequence of:


- A. the uneven distribution of financial resources**
- B. the uneven distribution of housing spaces**
- C. the uneven distribution of urban facilities**
- D. all of the above**



Q25

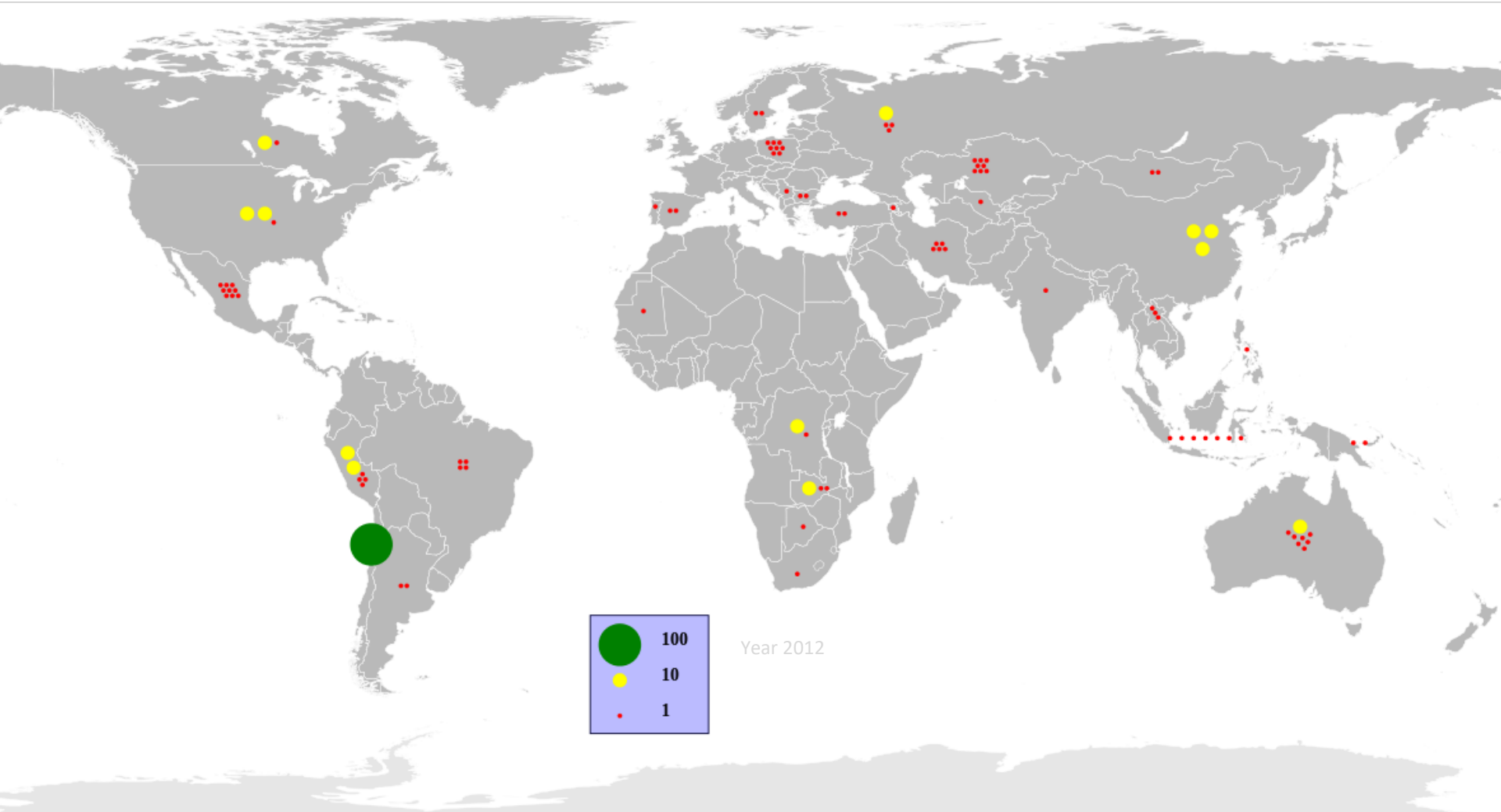
This image shows:

- A. Cyclones in Southern Pacific**
- B. Anticyclones in Southern Pacific**
- C. Cyclones in Northern Atlantic**
- D. Anticyclones in Northern Atlantic**



Q26**The following map shows:**

- A. Silver production**
- B. Silver reserves**
- C. Copper production**
- D. Copper reserves**



Q27

This underwater museum is located:


- A. at the bottom of the Pacific Ocean**
- B. at the bottom of the Atlantic Ocean**
- C. at the bottom of the Indian Ocean**
- D. at the bottom of the Mediterranean Sea**



Q28

All the photos in this slide are representative for one country. Choose the country:

- A. Norway**
- B. New Zealand**
- C. Canada**
- D. Iceland**



Q29

If you drive on this highway, you are heading towards:

- A. Yokohama**
- B. Kinshasa**
- C. Cape Town**
- D. Bogota**



Q30

The type of vegetation in this picture can be found in which of the following:

- A. the French Mediterranean Coast**
- B. the Atlantic French Coast**
- C. Florida Coast**
- D. Alaska Coast**



Q31

This type of house is specific to:

- A. Scotland**
- B. Ireland**
- C. Iceland**
- D. Finland**



Q32

This picture was taken in one of the following countries. Choose the country.

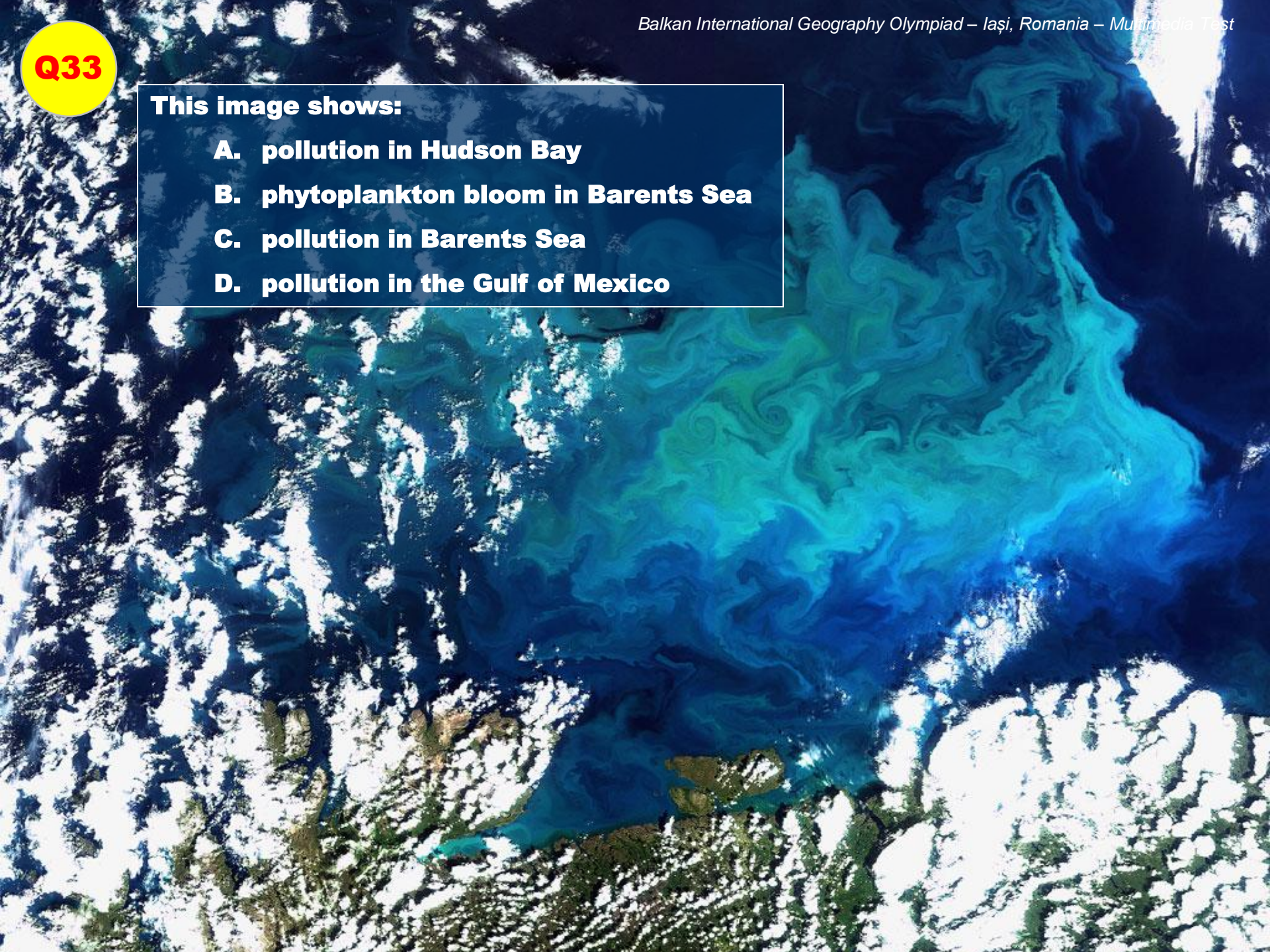
- A. France**
- B. Spain**
- C. Belgium**
- D. United Kingdom**



Q33

This image shows:

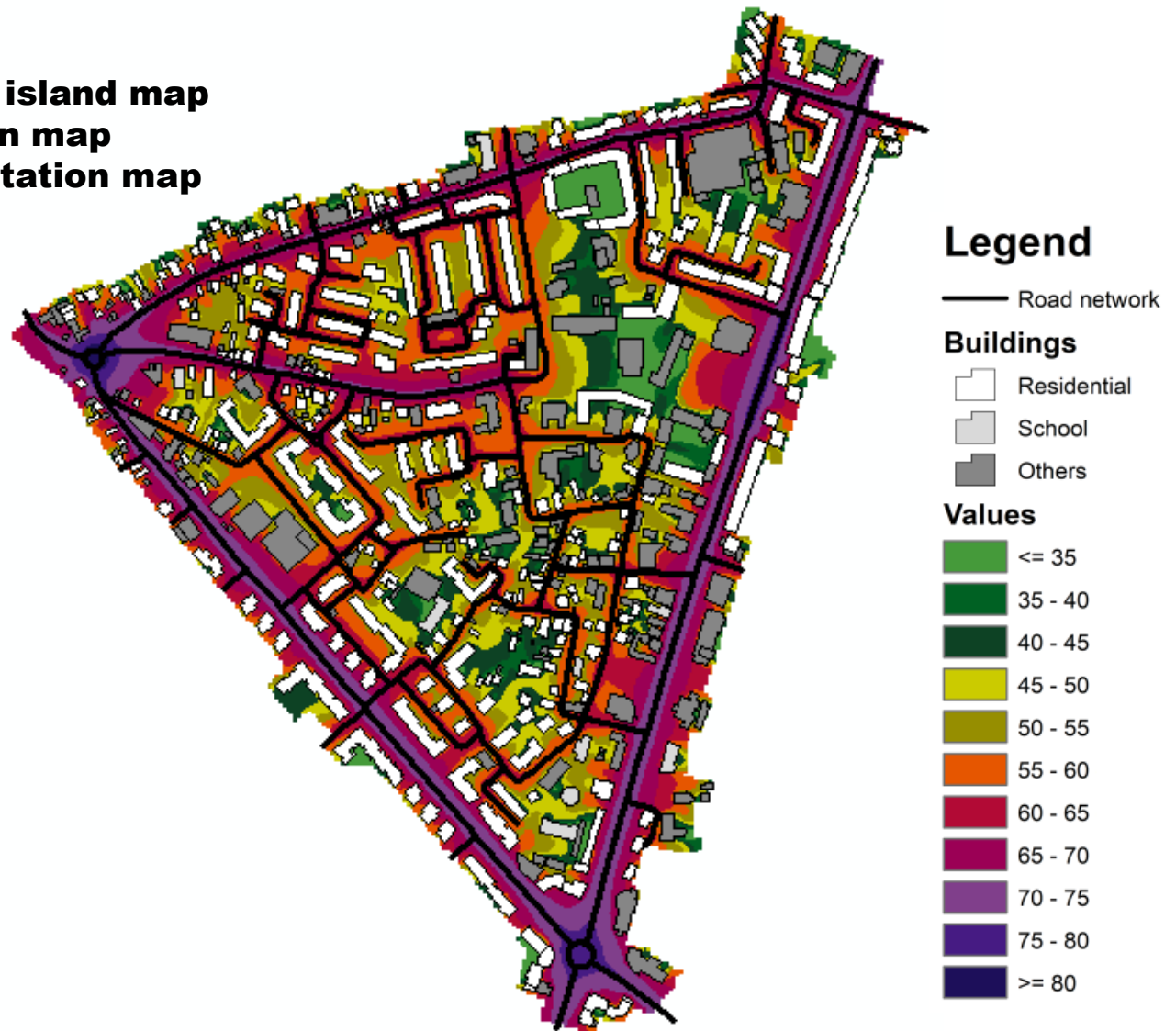
- A. pollution in Hudson Bay**
- B. phytoplankton bloom in Barents Sea**
- C. pollution in Barents Sea**
- D. pollution in the Gulf of Mexico**



Q34

The following map is:

- A. an urban heat island map**
- B. a NO₂ emission map**
- C. an urban vegetation map**
- D. a noise map**



Q35

The European lake shown in this image is:

- A. Neuchâtel**
- B. Léman / Geneva**
- C. Balaton**
- D. Mälaren / Malar**



Q36

This image shows:


- A. an American suburbia**
- B. an English suburbia**
- C. an American CBD**
- D. an English CBD**



Q37

This synoptic map illustrates :

- A. a hot air wave**
- B. a hurricane eye**
- C. a squall line**
- D. gusts**



Q38

The following countries are leading the world in regard to:

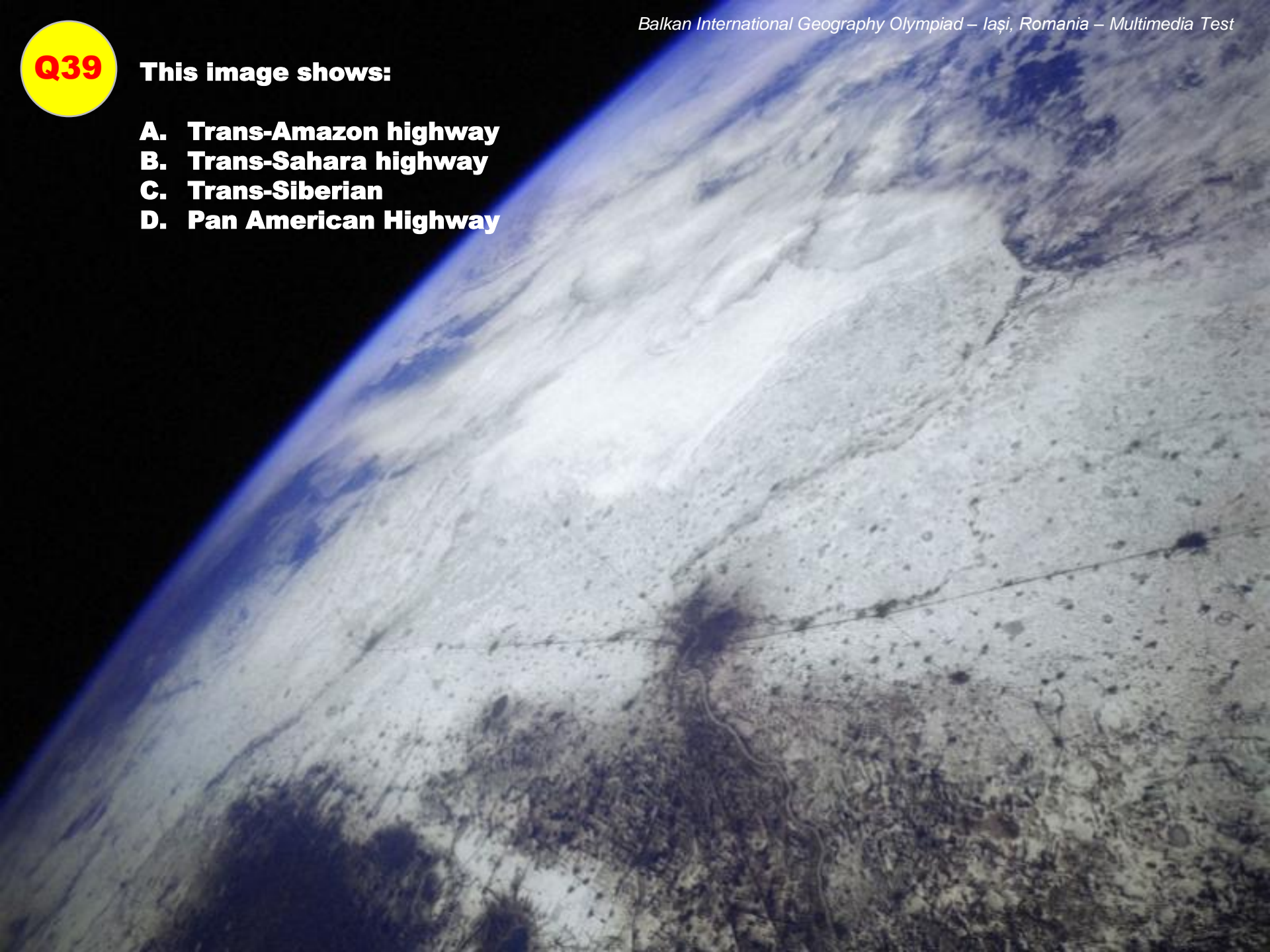
- A. merchandise exports**
- B. ship exports**
- C. merchant navy capacity**
- D. military navy size**



Q39

This image shows:

- A. Trans-Amazon highway**
- B. Trans-Sahara highway**
- C. Trans-Siberian**
- D. Pan American Highway**



Q40

This is your last question in this Multimedia Test and the last one in the Balkan International Geography Olympiad.

How did you find this Multimedia Test?

- A. easy**
- B. medium**
- C. difficult**
- D. very difficult**

University "Al.exandru Ioan Cuza" Iași - Romania



Palace of Culture Iași - Romania



We hope you enjoyed it!

CONGRATULATIONS for participating in this international Geography competition!
We were happy to have you here and we wish you the very best for the future!

**Balkan International Geography Olympiad
June 24 – 29, 2018, Iași - ROMANIA**



Authors of this MULTIMEDIA TEST:

Daniela LARION

Andra-Cosmina ALBULESCU

Department of Geography, University *Alexandru Ioan Cuza* of Iași, Romania

Other contributors: Ionuț ȘOREA, Stefania URSICĂ